

Name \_\_\_\_\_ Date \_\_\_\_\_ Period \_\_\_\_\_

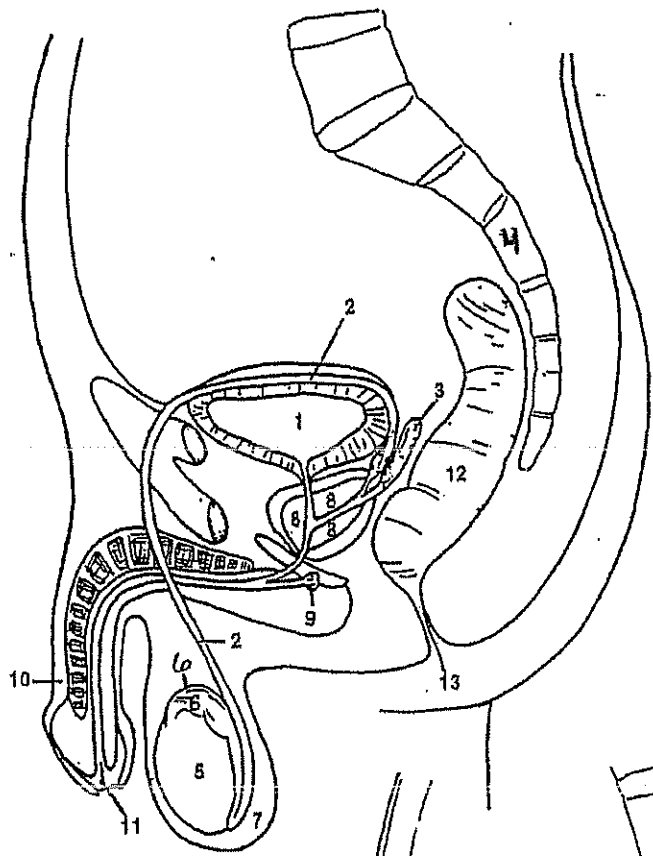
### Reproductive System Review

**Match** the letter with the correct number from the diagram. Some letters will be used more than once.

- |                     |                     |                    |             |             |
|---------------------|---------------------|--------------------|-------------|-------------|
| a. Scrotum          | b. Epididymis       | c. Vas deferens    | d. Testes   | e. Penis    |
| ab. Prostrate gland | ac. Seminal Vesicle | ad. Cowper's gland | ae. Bladder | bc. Urethra |
| bd. Rectum          | be. Cervix          | cd. Vertebra       | ce. Ovary   | abc. Anus   |
| abd. Fallopian Tube | abe. Vagina         | acd. Clitoris      | ace. Labia  | bdc. Uterus |

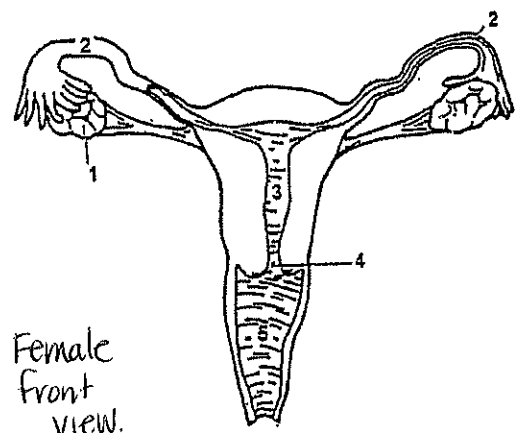
**Male**

1. \_\_\_\_\_
2. \_\_\_\_\_
3. \_\_\_\_\_
4. \_\_\_\_\_
5. \_\_\_\_\_
6. \_\_\_\_\_
7. \_\_\_\_\_
8. \_\_\_\_\_
9. \_\_\_\_\_
10. \_\_\_\_\_
11. \_\_\_\_\_
12. \_\_\_\_\_
13. \_\_\_\_\_

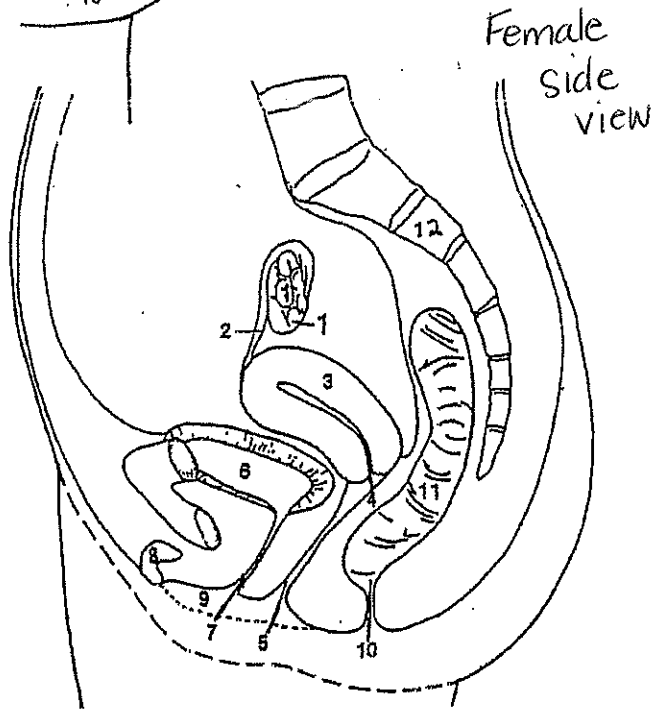


**Female**

1. \_\_\_\_\_
2. \_\_\_\_\_
3. \_\_\_\_\_
4. \_\_\_\_\_
5. \_\_\_\_\_
6. \_\_\_\_\_
7. \_\_\_\_\_
8. \_\_\_\_\_
9. \_\_\_\_\_
10. \_\_\_\_\_
11. \_\_\_\_\_
12. \_\_\_\_\_



Female front view.



Female side view

#s 1-5 are the same on these two.

**Matching 1:**

- |                          |  |
|--------------------------|--|
| 26. ___ Testosterone     | a) cells produced in the ovaries                       |
| 27. ___ Fetus            | b) motor for ejaculation                               |
| 28. ___ Semen            | c) when the penis becomes engorged with blood and hard |
| 29. ___ Fertilization    | d) tube that carries sperm from testes                 |
| 30. ___ Erection         | e) glands that produce the egg cells and hormones      |
| 31. ___ Prostate gland   | ab) fluid ejaculated from the penis                    |
| 32. ___ Ovaries          | ac) male hormone                                       |
| 33. ___ Egg cells        | ad) entrance to uterus                                 |
| 34. ___ Cervix           | ae) last 7 months of prenatal development              |
| 35. ___ Seminal vesicles | bc) sperm cell joins egg cell                          |
| 36. ___ Testes           | bd) when semen leaves the penis                        |
| 37. ___ Vas deferens     | be) adds a sugary fluid to semen                       |
| 38. ___ Ejaculation      | cd) organ that produces sperm                          |

**Matching 2:**

- |                         |   |
|-------------------------|---|
| 39. ___ Puberty         | a) a hormone produced in the ovaries                    |
| 40. ___ Scrotum         | b) brings urine and semen out of body through the penis |
| 41. ___ Vagina          | c) female organ of intercourse; birth canal             |
| 42. ___ Fallopian tubes | d) houses the fetus during pregnancy                    |
| 43. ___ Embryo          | e) cells produced in the testes                         |
| 44. ___ Estrogen        | ab) organ that nourishes the fetus                      |
| 45. ___ Uterus          | ac) folds of skin outside of the vagina                 |
| 46. ___ Labia           | ad) first two months of develop in the uterus           |
| 47. ___ Epididymis      | ae) where fertilization takes place                     |
| 48. ___ Urethra         | bc) stores sperm cells                                  |
| 49. ___ Clitoris        | bd) begins at about age 12 or 13                        |
| 50. ___ Sperm cells     | be) female erectile tissue between the labia            |
| 51. ___ Placenta        | cd) sac that regulates the temperature of the testes    |